
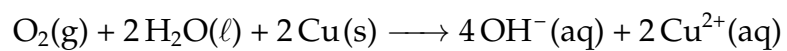


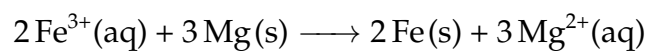
1. Sketch a voltaic cell for the following redox reaction. Label the anode and cathode and indicate the half-reaction that occurs at each electrode and the species present in each solution. Also indicate the direction of electron flow. Calculate the standard cell potential. Write the line notation of the cell.



2. Use tabulated electrode potentials to calculate ΔG_{rxn}° and the equilibrium constant, K , for the following reaction at 25 °C.



3. A voltaic cell employs the redox reaction:



Calculate the cell potential at 25 °C under standard conditions and $[\text{Fe}^{3+}] = 2.00 \text{ M}$ and $[\text{Mg}^{2+}] = 1.5 \times 10^{-3} \text{ M}$.

4. A concentration cell consists of two Sn/Sn^{2+} half-cells. The cell has a potential of 0.10 V at 25°C. What is the ratio of the Sn^{2+} concentration in the two half-cells?